

1.

(a) 10cm

(b) 9cm

(c) 16.5cm

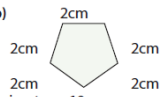
2.

(a)



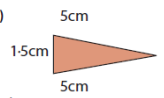
Perimeter = 13cm

(b)



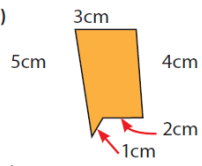
Perimeter = 10cm

(c)



Perimeter = 11.5cm

(d)



Perimeter = 15cm